










Name \_\_\_\_\_

SkylerSquirrel wishes she had a pony for a pet!


1. In the box, write the **total** number of items in each row.
2. Fold the paper along the dotted line.
3. How many items **remain**? Write the answer on the folded paper.
4. Tell a **subtraction story** for each row.  
For example, "There are 3 apples. A horse eats 1. Now there are 2 apples left."






Name \_\_\_\_\_

Draw 5 boxes of fish food. Cross out 1. Write how many boxes **remain**. Tell a friend a **subtraction story** about the boxes.




\_\_\_\_\_

Draw 7 dog bones. Cross out 1. Write how many **remain**.




\_\_\_\_\_

Draw 9 cat collars. Draw a tag on 1 collar. Then write the number of collars that do **not** have a tag.



\_\_\_\_\_

Draw 6 bird swings. Make a **few** big and the rest little. Write the number of swings that are **not** big.



\_\_\_\_\_