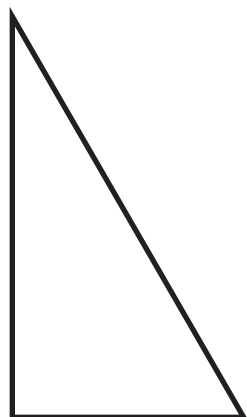







Name _____

Draw the missing **half** of each shape. Use the stars to guide you. Then write $\frac{1}{2}$ in the part of the shape you drew.





Name _____

GoldiFox spreads out all of her pennies on the kitchen table. Goldi's Grandma is very happy that her favorite president, Abraham Lincoln, is on the **front** of every penny. Color all the **fronts** of GoldiFox's pennies brown.

