
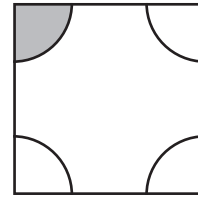


—



—




—




—



—




—



—



—



—

Show  $\frac{4}{4}$  of 3 sets of objects.



**REPRESENTATION**

## Understanding Fractions Review

1.

$\frac{4}{5}$



- True  
 False

2.


$\frac{1}{6}$



- True  
 False

3.

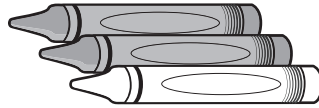
$\frac{3}{4}$



- True  
 False

4.

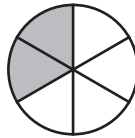
$\frac{1}{3}$



- True  
 False

5.

$\frac{2}{6}$



- True  
 False

6.

$\frac{5}{5}$



- True  
 False

7.

$\frac{5}{6}$



- True  
 False

8.

$\frac{2}{4}$



- True  
 False

9.

$\frac{3}{3}$



- True  
 False

10.

$\frac{2}{5}$



- True  
 False