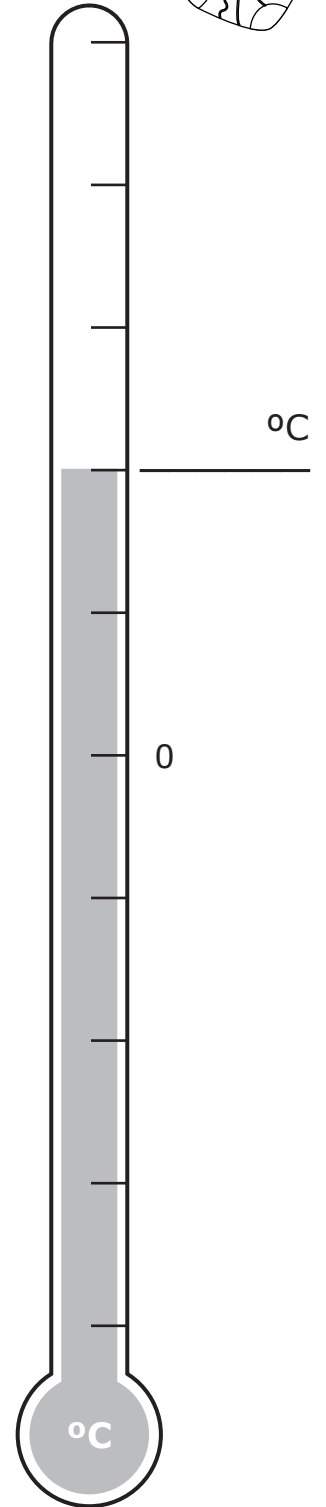
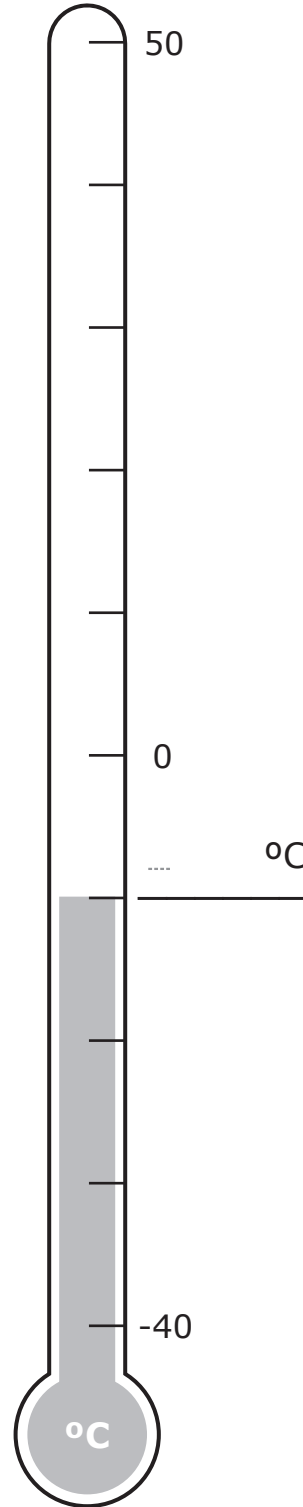

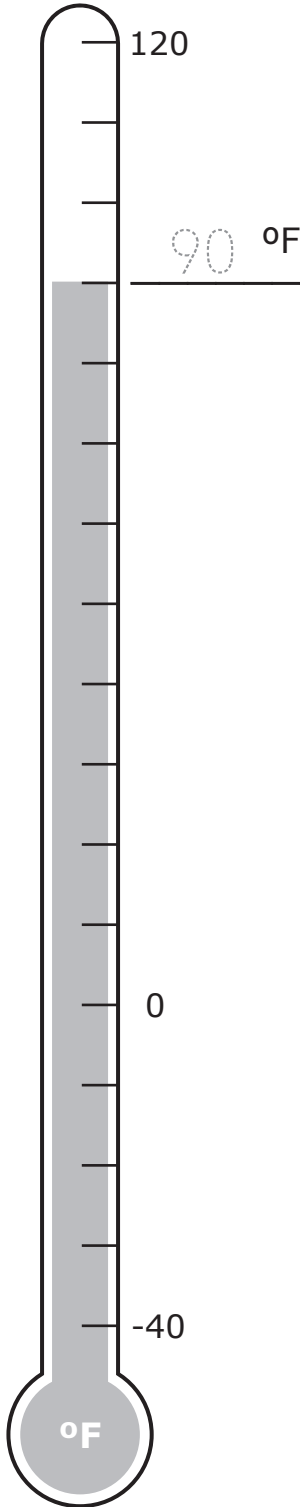


# Thermometers

**Directions: Write in the temperature next to each thermometer.** Circle the clothing and drinks most-likely needed during each temperature.



$4 = 2 \times 2$



- True  
 False

$15 = 3 \times 5 \text{ or } 2 \times 6$

- True  
 False

$40 = 5 \times 8 \text{ or } 4 \times 10$

- True  
 False

$64 = 9 \times 9$

- True  
 False

$35 = 5 \times 7$

- True  
 False

$27 = 3 \times 9$

- True  
 False

$14 = 2 \times 7$

- True  
 False



$42 = 6 \times 7$

- True  
 False

$24 = 3 \times 7 \text{ or } 4 \times 6$

- True  
 False

$18 = 2 \times 9 \text{ or } 3 \times 6$

- True  
 False

