


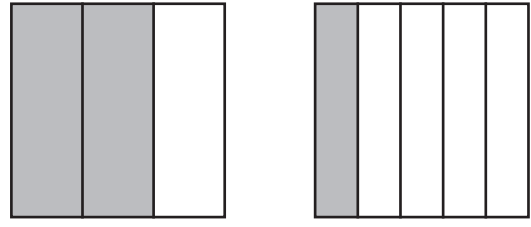
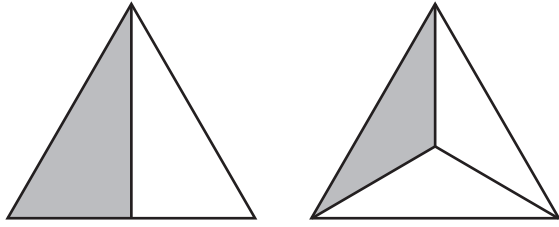


30	24	4	6	40	5	8	1	5	21	7	3
16	4	4	2	6	28	24	21	3	7	6	5
54	6	9	3	42	7	6	3	1	3	42	56
4	14	7	2	16	4	4	7	24	28	7	4
36	6	6	30	5	6	3	3	4	49	7	7
42	3	12	4	3	2	2	40	6	14	7	2
6	24	4	6	36	32	4	8	10	5	2	2
7	54	3	28	4	7	30	5	5	7	28	1
30	6	63	7	9	45	5	9	2	18	7	2
36	6	6	4	42	7	6	13	11	3	4	9
8	25	9	49	56	5	49	18	14	6	20	30
4	5	49	7	7	21	7	3	7	5	5	4
2	7	16	2	8	42	7	6	2	24	4	6



An Orchestra performs The Nutcracker Suite, one songs has 49 notes. Each musician gets to play 7 notes. How many musicians does it take to perform the entire song? _____

Directions: Write the fraction represented by the number of parts making up the whole shape and mark greater than: “>” or less than: “<” between the two fractions.



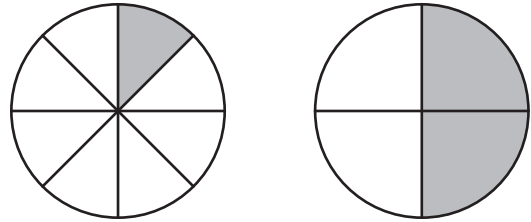
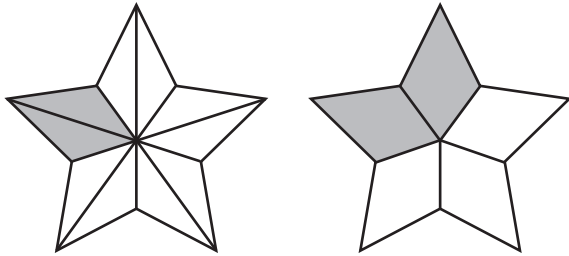
$\frac{1}{2}$



$\frac{1}{3}$

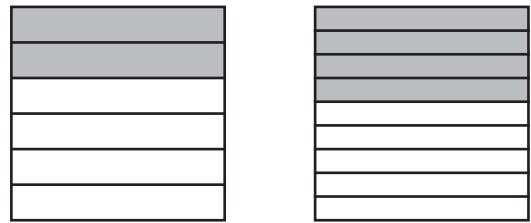
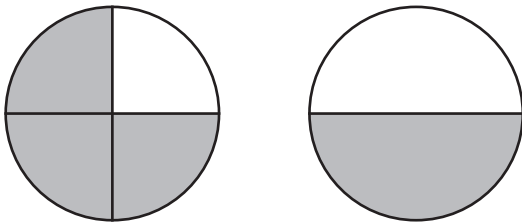



— ○ —



— ○ —

— ○ —



— ○ —

— ○ —

