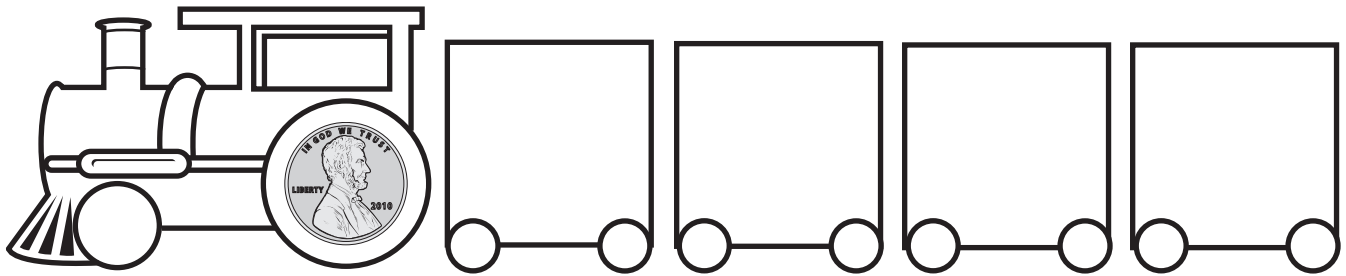


Take-Away Tom is playing with 2 toy trains. Color the *shortest* train *green*. Color the *longest* train *red*. Now count the cars on the green train. Use a green crayon to color one square for each car in the row labeled "green." Do the same for the red train. Talk about your **graph**.

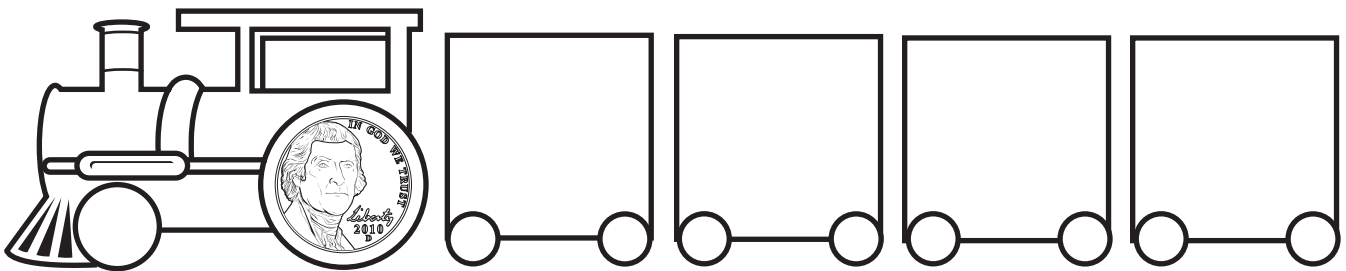


	1	2	3	4	5
green					
red					

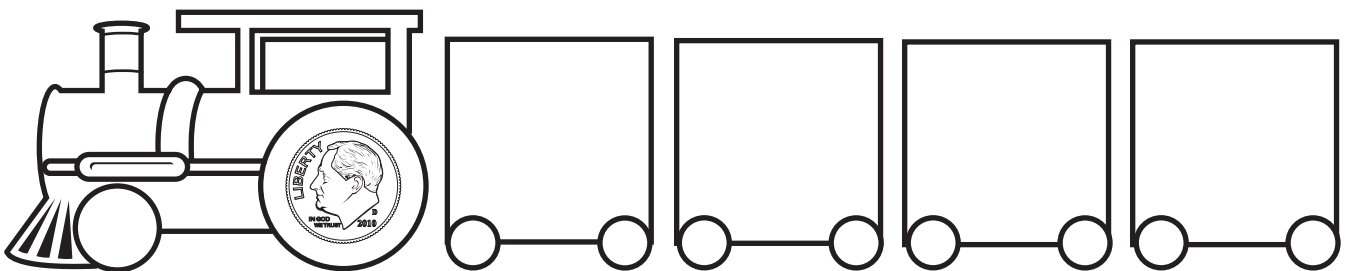
Look at the trains. Each train carries a different type of coin. Cut out the coins below. Glue each coin on the correct train. Then fill in the blank with the correct amount below each train. Be careful! Don't forget to add the coin on the engine.



The penny train is worth _____ ¢.



The nickel train is worth _____ ¢.



The dime train is worth _____ ¢.

