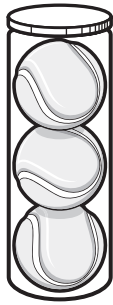





Directions: Sets: How many objects are in each set, write your answer on the line for each









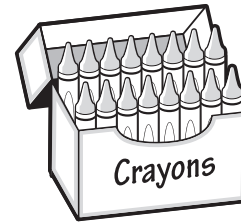













Draw a picture of a set of 10 objects.

Skip count by 9s shading each square as you move left to right. Then draw a path through the maze.



| | | | | | | | | | |
|----|----|----|----|----|----|----|----|----|----|
| 5 | 6 | 8 | 9 | 11 | 10 | 12 | 13 | 14 | 18 |
| 20 | 27 | 30 | 36 | 38 | 45 | 46 | 54 | 63 | 55 |
| 71 | 72 | 73 | 81 | 84 | 90 | 93 | 9 | 10 | 18 |
| 26 | 27 | 35 | 36 | 41 | 45 | 49 | 54 | 63 | 72 |
| 65 | 71 | 73 | 74 | 76 | 81 | 82 | 90 | 91 | 8 |
| 7 | 9 | 18 | 27 | 36 | 45 | 54 | 63 | 72 | 81 |
| 83 | 90 | 9 | 8 | 6 | 7 | 10 | 17 | 18 | 15 |
| 25 | 27 | 36 | 32 | 45 | 54 | 63 | 62 | 72 | 73 |
| 74 | 75 | 80 | 80 | 81 | 91 | 90 | 93 | 9 | 18 |
| 27 | 36 | 28 | 31 | 29 | 30 | 45 | 35 | 37 | 38 |