


Touch and count the TouchPoints to **add**. Write the **sum**.



1 + 1

---



---



---

5 + 1


---



---



---



3 + 1

---



---



---

7 + 1


---



---



---



2 + 1


---








---



---



Look at the **graph**. Draw apples to show **1 more apple than** there are pies.

SkipperSkunk likes to chat with the wisest bird in the forest. Follow the numbers 0 to 17 to determine which woodland bird Skipper visits for advice.

