

Desserts Sold at the School Fair

cupcakes



132

ice cream



298

cake slices




171

pie slices



246

cookies



386

Kate and Andrew compare numbers of desserts sold at the School Fair. Write subtraction problems to find the differences.



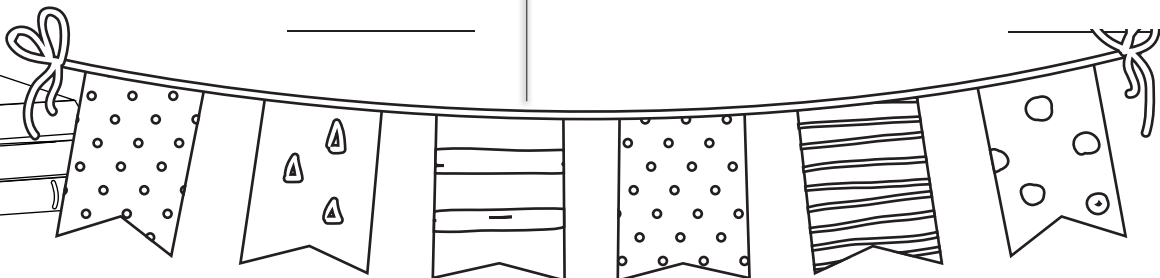

$$\begin{array}{r} \underline{\hspace{2cm}} \\ - \hspace{2cm} \\ \hline \hspace{2cm} \end{array}$$


$$\begin{array}{r} \underline{\hspace{2cm}} \\ - \hspace{2cm} \\ \hline \hspace{2cm} \end{array}$$



$$\begin{array}{r} \underline{\hspace{2cm}} \\ - \hspace{2cm} \\ \hline \hspace{2cm} \end{array}$$


$$\begin{array}{r} \underline{\hspace{2cm}} \\ - \hspace{2cm} \\ \hline \hspace{2cm} \end{array}$$


$$\begin{array}{r} \underline{\hspace{2cm}} \\ - \hspace{2cm} \\ \hline \hspace{2cm} \end{array}$$


$$\begin{array}{r} \underline{\hspace{2cm}} \\ - \hspace{2cm} \\ \hline \hspace{2cm} \end{array}$$


Directions: Add the number of things Jonah counted on a brisk walk through the woods.

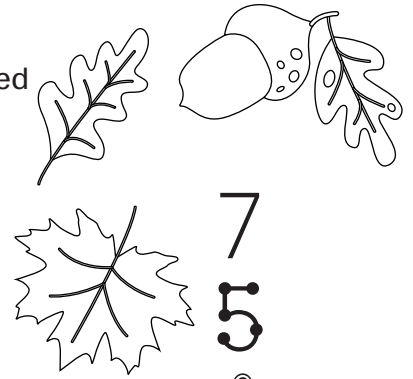


$$\begin{array}{r} 8 \\ + 4 \\ + 3 \\ \hline \end{array}$$

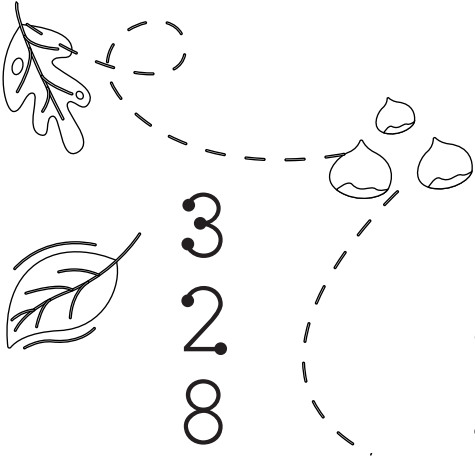
$$\begin{array}{r} 9 \\ + 5 \\ + 2 \\ \hline \end{array}$$

$$\begin{array}{r} 7 \\ + 3 \\ + 4 \\ \hline \end{array}$$

$$\begin{array}{r} 1 \\ + 7 \\ + 4 \\ \hline \end{array}$$



$$\begin{array}{r} 7 \\ + 5 \\ + 5 \\ \hline \end{array}$$

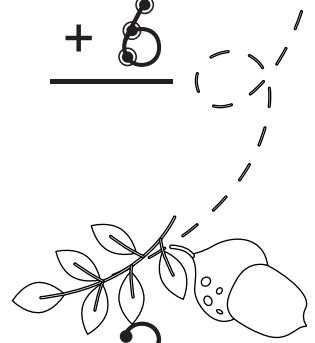


$$\begin{array}{r} 3 \\ + 2 \\ + 8 \\ + 4 \\ \hline \end{array}$$

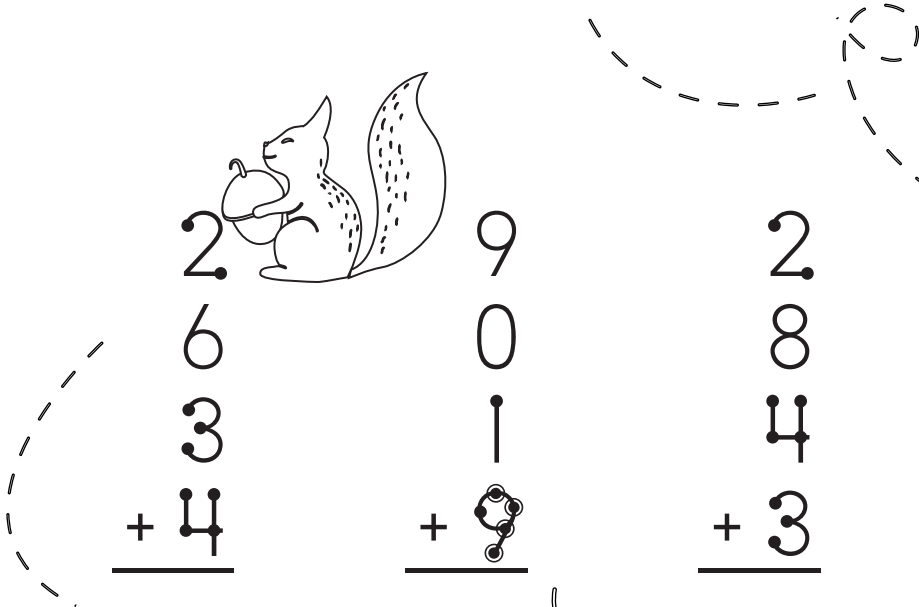
$$\begin{array}{r} 6 \\ + 3 \\ + 5 \\ + 2 \\ \hline \end{array}$$

$$\begin{array}{r} 5 \\ + 7 \\ + 4 \\ + 1 \\ \hline \end{array}$$

$$\begin{array}{r} 9 \\ + 5 \\ + 0 \\ + 3 \\ \hline \end{array}$$



$$\begin{array}{r} 2 \\ + 5 \\ + 3 \\ + 4 \\ \hline \end{array}$$



$$\begin{array}{r} 2 \\ + 6 \\ + 3 \\ + 4 \\ \hline \end{array}$$

$$\begin{array}{r} 9 \\ + 0 \\ + 1 \\ + 9 \\ \hline \end{array}$$

$$\begin{array}{r} 2 \\ + 8 \\ + 4 \\ + 3 \\ \hline \end{array}$$

$$\begin{array}{r} 5 \\ + 3 \\ + 9 \\ + 2 \\ \hline \end{array}$$

$$\begin{array}{r} 2 \\ + 1 \\ + 8 \\ + 2 \\ \hline \end{array}$$

