

To subtract say "twelve." Continue touching and counting backward on the TouchPoints of the second number. Then write the answer.

$12 - 5 = \underline{\quad}$

$12 - 2 = \underline{\quad}$

$12 - 4 = \underline{\quad}$

$12 - 1 = \underline{\quad}$

$12 - 6 = \underline{\quad}$

$12 - 8 = \underline{\quad}$

$12 - 3 = \underline{\quad}$


$12 - 9 = \underline{\quad}$

$12 - 0 = \underline{\quad}$

$12 - 7 = \underline{\quad}$


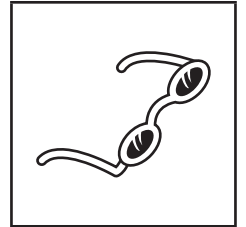
This book about wizards was written in England. Look at the pictures. What is the book?

Answer the word problems.



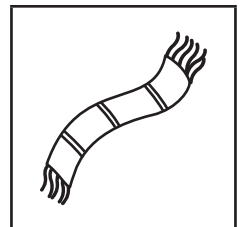
There are 12 owls.
3 are not flying.
How many are flying?

Harry has 12 pairs of eye glasses.
6 are broken. How many are not broken?




There are 12 brooms in the basement.
8 have brown handles. How many do not?

There are 12 scarves.
5 have gold and maroon stripes. How many do not?



This English painting is called *The Shrimp Girl*. Subtract 10 from each number on the painting and cross out the answer in the key below. Color the matching space on the girl selling shrimp.



brown: 63, 15, 7, 54, 26, 44, 64

green: 46, 31

yellow: 32, 79, 3, 19, 75, 51

orange: 69, 37