

Subtract to solve the money problems. The line segments show where to regroup numbers. Remember to write your answers with **dollar signs** and **decimal points**!

$$\begin{array}{r} \downarrow \\ \$8.34 \\ - 5.16 \\ \hline \$3.18 \end{array}$$

$$\begin{array}{r} \downarrow \\ \$8.46 \\ - 1.29 \\ \hline \end{array}$$

$$\begin{array}{r} \downarrow \\ \$4.92 \\ - 3.34 \\ \hline \end{array}$$

$$\begin{array}{r} \downarrow \\ \$6.56 \\ - 3.48 \\ \hline \end{array}$$

$$\begin{array}{r} \downarrow \\ \$7.61 \\ - 2.28 \\ \hline \end{array}$$

$$\begin{array}{r} \downarrow \\ \$3.84 \\ - 2.57 \\ \hline \end{array}$$

$$\begin{array}{r} \downarrow \\ \$6.47 \\ - 4.28 \\ \hline \end{array}$$

$$\begin{array}{r} \downarrow \\ \$5.45 \\ - 4.06 \\ \hline \end{array}$$

$$\begin{array}{r} \downarrow \\ \$8.74 \\ - 7.28 \\ \hline \end{array}$$


$$\begin{array}{r} \downarrow \\ \$4.66 \\ - 2.59 \\ \hline \end{array}$$

$$\begin{array}{r} \downarrow \\ \$9.51 \\ - 2.27 \\ \hline \end{array}$$

$$\begin{array}{r} \downarrow \\ \$5.82 \\ - 3.73 \\ \hline \end{array}$$



Dante had 5 pieces of fruit. He and his friends ate 2 of them. Gia had 8 pieces of fruit. She and her friends ate 4 of them. How many pieces of fruit did Dante have left? _____

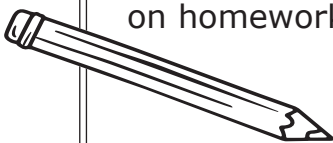


What are the fact families in this problem? _____

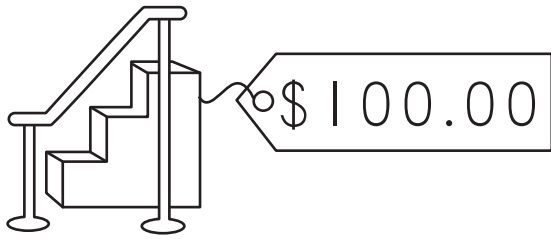
Rick worked on math for 18 minutes. He worked on adding for 9 minutes. How many minutes did he do subtracting? _____ The next day Rick worked on math again. He did adding for 8 minutes and subtracting for 7 minutes. Rick worked on homework the same number of minutes both days.

true false


What are the fact families in this problem? _____




You have 4 **twenty-dollar** bills. How many **more** do you need to buy each item?



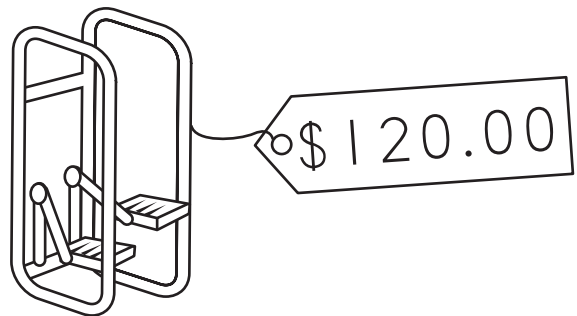
___ more twenty-dollar bill



___ more twenty-dollar bills



___ more twenty-dollar bills

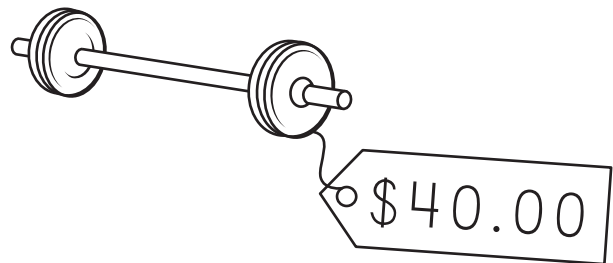


___ more twenty-dollar bills


You have 6 **twenty-dollar** bills. How many would you have **left** if you bought each item?



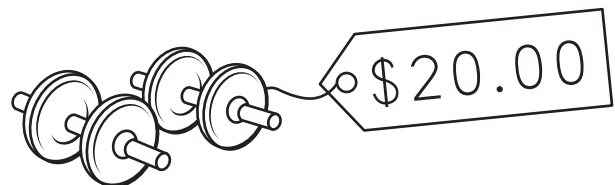
___ twenty-dollar bill left



___ twenty-dollar bills left



___ twenty-dollar bills left



___ twenty-dollar bills left