



Ring the number of **dimes** needed to buy each toy dinosaur. If 2 **nickels** are the same as 1 **dime**, how many **nickels** are needed to buy each toy?



70¢

Number of **dimes**? 7      Number of **nickels**? 14




30¢

Number of **dimes**?           Number of **nickels**?     




\$0.60

Number of **dimes**?           Number of **nickels**?     



50¢

Number of **dimes**?           Number of **nickels**?     



\$0.90

Number of **dimes**?           Number of **nickels**?     




Different kinds of tools are used for measuring. Study the measuring tools below. Match the word in each box to the tool that measures it.

temperature


length

weight

capacity



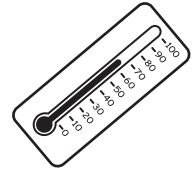
A. ruler



B. balance scale

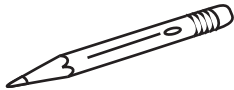


C. measuring cup



D. thermometer

Select the best measuring tool from those pictured above. Write the matching letter on the line segment.



How long?

  A  



How hot?

\_\_\_\_\_



How cold?

\_\_\_\_\_




How wide?

\_\_\_\_\_



How full?

\_\_\_\_\_



How short?

\_\_\_\_\_




How warm?

\_\_\_\_\_



How much?

\_\_\_\_\_



Which is heavier?

\_\_\_\_\_



Which is lighter?

\_\_\_\_\_