
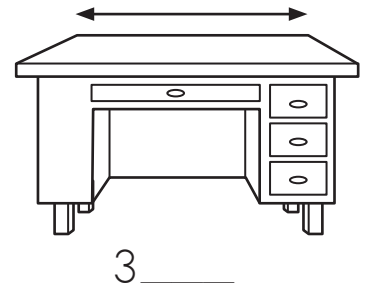

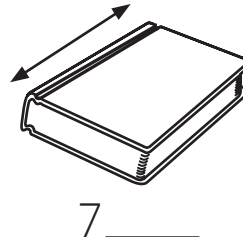
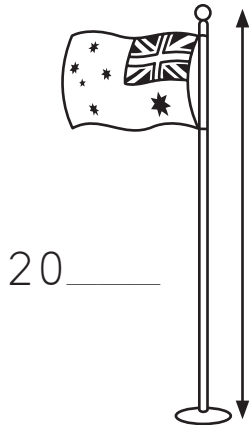
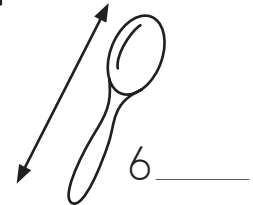
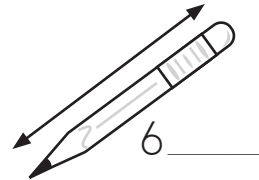
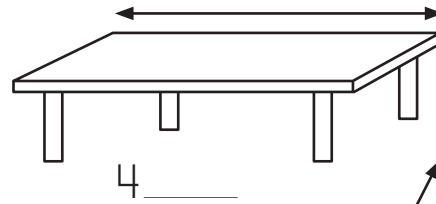
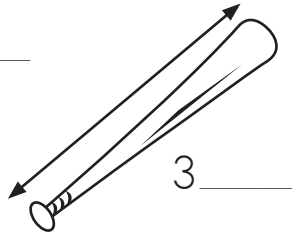



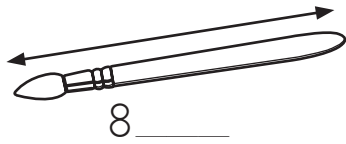


Cut out the clocks below and put them in order from the earliest time to the latest.
 Glue the clocks to the squares in the story. Read the story aloud to a friend.

Sami goes to the school lunchroom at She takes her lunch box to
 the table and is eating by At she has finished her lunch
 and goes to recess. Sami and Tim run and play until it is time to go back to
 class at Math class starts at and ends one hour later at
 Sami's class listens to a story until Wow! It is
 and time to pack up and go home. What a quick afternoon!

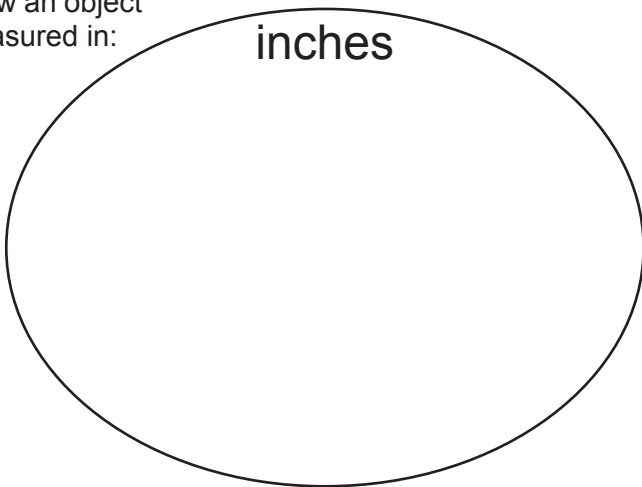


A foot is a standard unit that measures length. A foot is about the size of a man's boot! Look at the number next to each object. Write ft. for 'feet' or in. for 'inches' on the line segment. Look at a ruler to determine if your choice makes sense.



Draw an object measured in:

inches



Draw an object measured in:

feet

