

It's time for back to school, but it still can get warm outside! Add the number of days that the temperature has been above 80 degrees fahrenheit or higher. Count forward to find the **missing addend**. Make a dot for each number as you count. In the box, write the number of dots you draw.

$$\begin{array}{r} 6 \\ + \square \cdot \cdot \cdot \\ \hline 12 \end{array}$$

$$\begin{array}{r} 8 \\ + \square \\ \hline 16 \end{array}$$


$$\begin{array}{r} 9 \\ + \square \\ \hline 18 \end{array}$$

$$\begin{array}{r} 3 \\ + \square \\ \hline 6 \end{array}$$

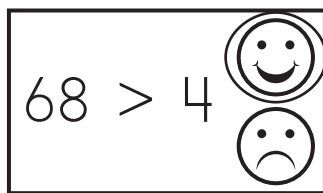
$$\begin{array}{r} \square \\ + 7 \\ \hline 10 \end{array}$$

$$\begin{array}{r} \square \\ + 5 \\ \hline 10 \end{array}$$

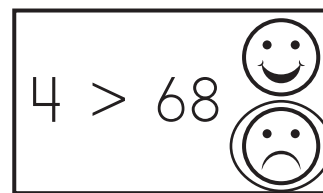
$$\begin{array}{r} \square \\ + 2 \\ \hline 7 \end{array}$$



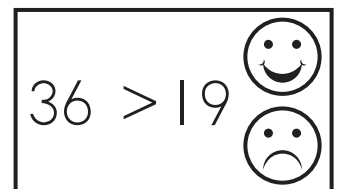
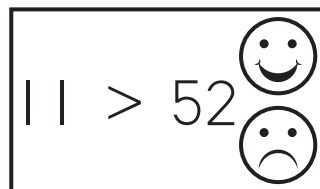
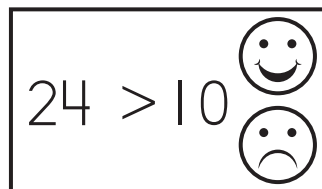
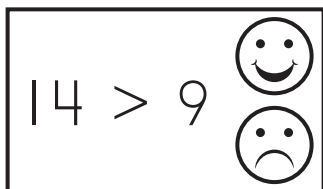
Ring the correct face! Read the **math sentences** aloud.






“68 is greater than 4.”
Yes! 😊



“4 is greater than 68.”
No! 😞



Trace, then write, the numeral 1. Then color **one** school item in each box **below**.



Meet the CritterCrew. Find UnoBear. Now, let's see if you can find the other animals by their names: MirabelMouse, SkipperSkunk, BunniBunny, GoldiFox. Which raccoon brother, do you think is Tag-Along Tm? Why? Which is Take-Away Tom? Have fun coloring and counting each of them, how many friends are there in the crew?

