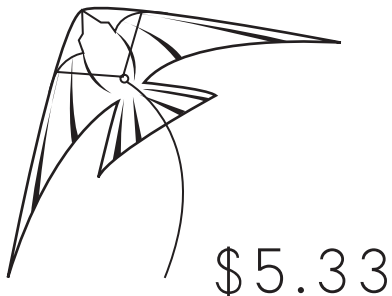
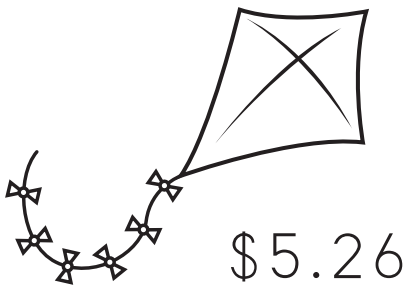
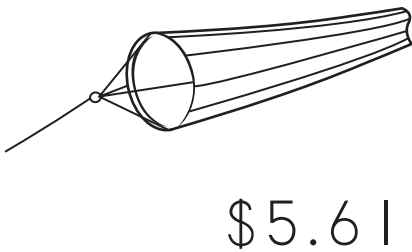
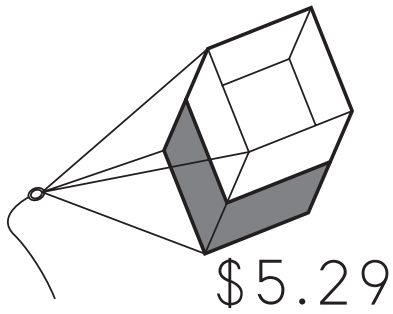


Draw a line segment from each kite to the correct amount of money.



Directions: Solve the problems by adding the numbers in each row, and write the answer. Then read the answers aloud quietly to count by 6.

$6 + 0 = \boxed{6}$

$6 + 6 = \boxed{}$

$6 + 6 + 6 = \boxed{}$

$6 + 6 + 6 + 6 = \boxed{}$

$6 + 6 + 6 + 6 + 6 = \boxed{}$

$6 + 6 + 6 + 6 + 6 + 6 = \boxed{}$

$6 + 6 + 6 + 6 + 6 + 6 + 6 = \boxed{}$

$6 + 6 + 6 + 6 + 6 + 6 + 6 + 6 = \boxed{}$

$6 + 6 + 6 + 6 + 6 + 6 + 6 + 6 + 6 = \boxed{}$

$6 + 6 + 6 + 6 + 6 + 6 + 6 + 6 + 6 + 6 = \boxed{}$

