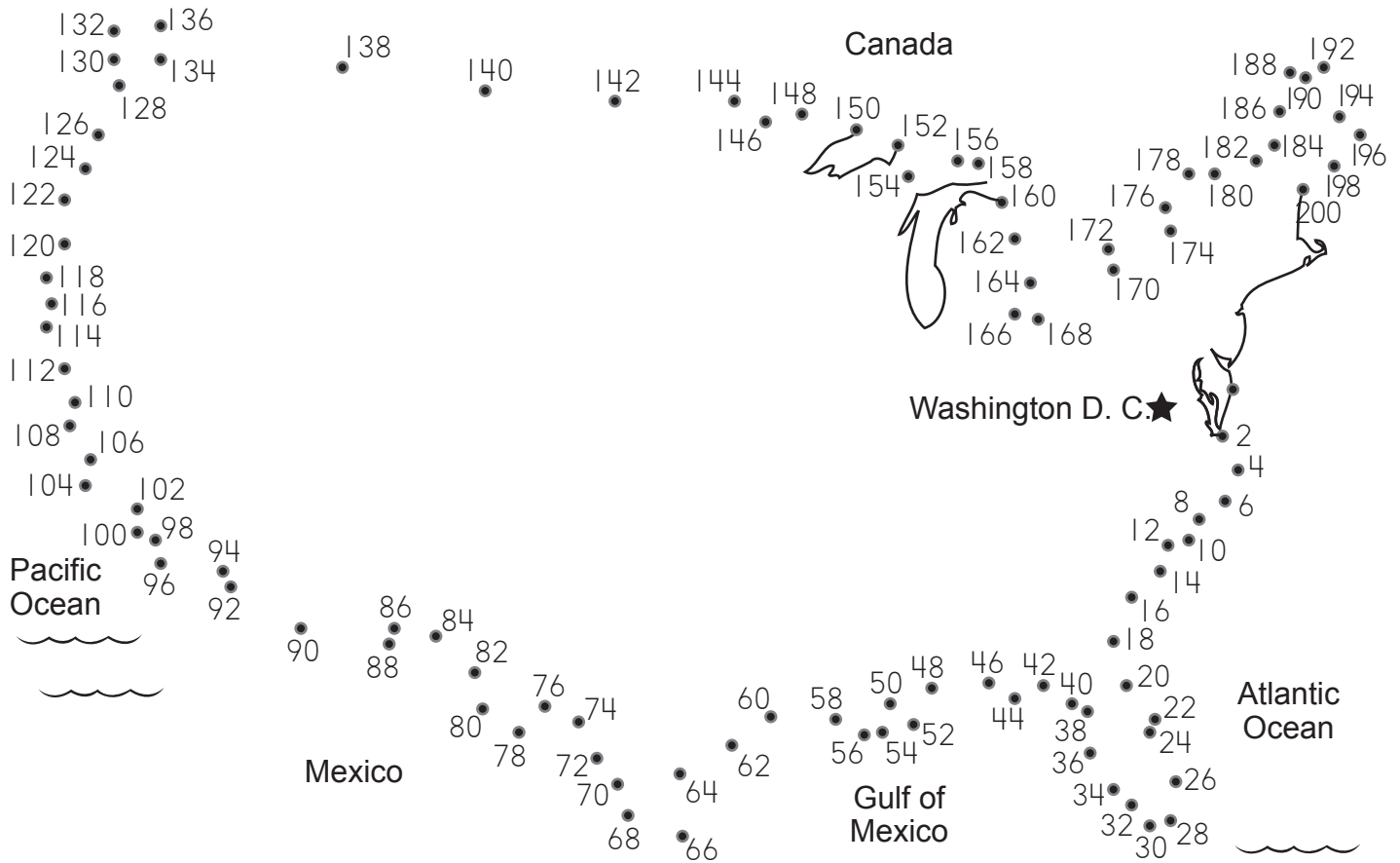


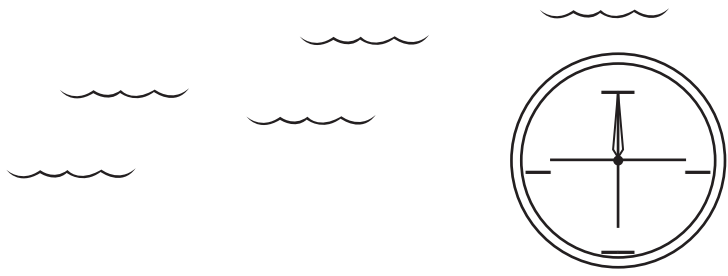


Count by 2 and connect the dots to form a map of the continental United States of America. Fill in the compass points and answer the questions below.



Key	
	Water
	Capital City



What country is north of the USA? _____

What ocean is west of the USA? _____

What country is south of the USA? _____

What ocean is east of the USA? _____

Paul Revere is an important person in history. One night long ago he galloped on horseback from Boston to Lexington. Do you know what he was shouting? To find out solve the multiplication sentences and match your answers to the numbers below.

$1 \times 4 = \underline{\quad} i$

$1 \times 8 = \underline{\quad} r$

$2 \times 4 = \underline{\quad} s$

$2 \times 8 = \underline{\quad} n$

$5 \times 4 = \underline{\quad} c$

$5 \times 8 = \underline{\quad} B$

$10 \times 4 = \underline{\quad} e$

$10 \times 8 = \underline{\quad} r$

$1 \times 5 = \underline{\quad} e$

$1 \times 8 = \underline{\quad} m$

$2 \times 5 = \underline{\quad} t$

$2 \times 8 = \underline{\quad} i$

$5 \times 5 = \underline{\quad} o$

$5 \times 8 = \underline{\quad} g$

$5 \times 10 = \underline{\quad} h$

$10 \times 8 = \underline{\quad} t$

$5 \times 0 = \underline{\quad} h$

$10 \times 8 = \underline{\quad} a$



10 0 5 30 6 4 80 16 8 50

90 60 40 20 25 8 16 12 40