



























### Favorite Pet

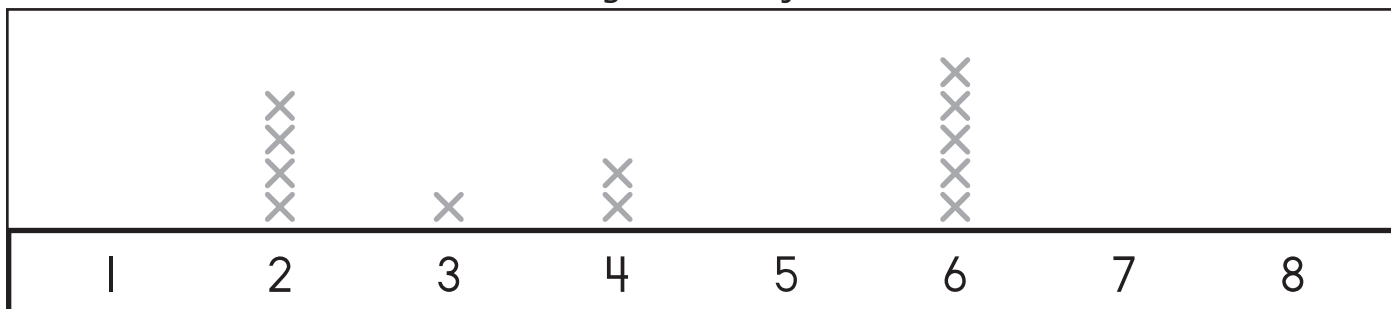
- (A) Cats are the most favorite.
- (B) Fish are the least favorite.
- (C) Dogs are a favorite more than cats and fish combined.
- (D) Fish are a favorite less than cats.

### Favorite Color


Black						
Green						
Purple						

- (A) Black is a favorite more than green.
- (B) Black is a favorite more than purple.
- (C) Green is a favorite more than purple.
- (D) Purple is the most favorite.





### Lengths of Objects



- (A) There are no objects of 1, 5, 7, and 8 units.
- (B) There are the most objects of 6 units.
- (C) There are more objects of 4 units than 2 units.
- (D) There are fewer objects of 2 units than 3 units.



### Animals and Habitats

 rainforest											
 mountain											
 ocean											
 desert											

How many animals are in all habitats? \_\_\_\_\_

How many animals are in the desert and ocean habitats combined? \_\_\_\_\_

In which habitat are the most animals? \_\_\_\_\_

What is the difference between the number of animals in the rainforest and mountain habitats? \_\_\_\_\_

In which habitat are the fewest animals? \_\_\_\_\_

What is the difference between the number of animals in the desert and ocean habitats compared to the rainforest and mountain habitats? \_\_\_\_\_

What is the difference between the habitat with the greatest and fewest animals? \_\_\_\_\_