

Add or subtract and use the answer/color combinations to help you color the picture below.


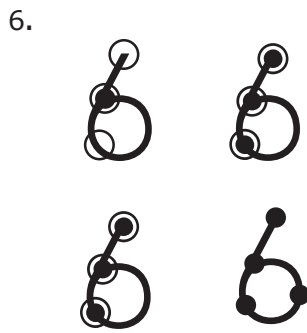
1. 11 12 13 14 15 12 16 17 18 19 20

2. $9 \underline{\quad} 11 \underline{\quad} 13$

3. $\underline{\hspace{4cm}}$

4. eleven twenty thirteen

5. $\underline{\hspace{4cm}}$



8.

$$\begin{array}{r} 8 \\ + 5 \\ \hline \end{array}$$

9.

$$\begin{array}{r} 3 \\ + 7 \\ \hline \end{array}$$

10.

$$6 + 8 \bigcirc 4 + 7$$

11.

$$7 + 3 \bigcirc 5 + 9$$

12. There are 12 seconds on the timer.
8 seconds pass.
How many are left?
 $\underline{\hspace{2cm}}$ seconds

- A. 4
- B. 5
- C. 19
- D. 11

13. sixteen thirteen

- A. $<$
- B. $=$
- C. $>$
- D. none of the above

14. Cho saw 7 cats in the grass at the park. He saw 3 cats in the dirt. He saw 3 cats on the sidewalk. How many cats did he see?

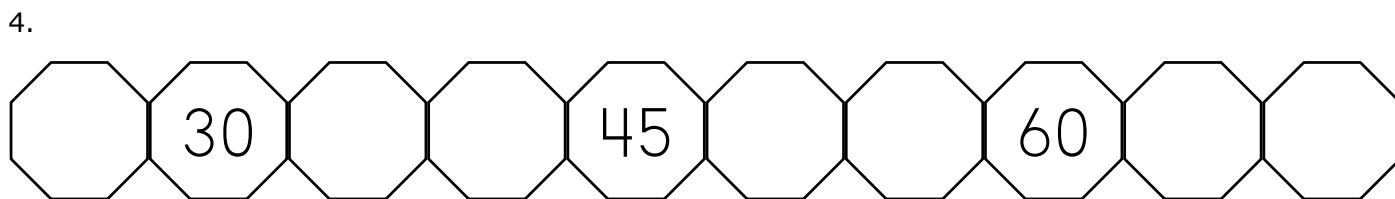
$$\square + \square + \square = \square$$

cats

1. $234 < 234$
 True False


2. $787 > 499$
 True False

3. $529 = 529$
 True False



5. & 6.
43 44 45 43 46 47 48 49 50 51 52

935 936 937 938 939 940 942 941 942 943 944



8. 885 _____
 887
 886
 884

9. 267 _____
 266
 269
 268

10. 430 _____
 439
 431
 429

11. 753 _____ 755

12. 28 _____ 30

13. 632 _____ 634

14. _____ | 46
 145
 149
 147

15. _____ | 90 |
 903
 900
 899

16. _____ | 574
 575
 572
 573

17.
Write the number seven hundred forty-nine. _____
Write the number nine hundred three. _____