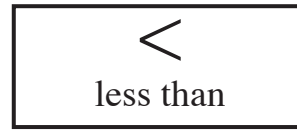
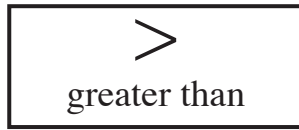


Read the clues for each problem. Then ring the mystery number.

? ? **MYSTERY NUMBERS** ? ?



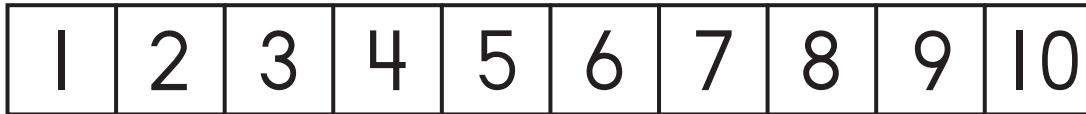
I am  $> 6$ . I am  $< 8$ . What number am I?



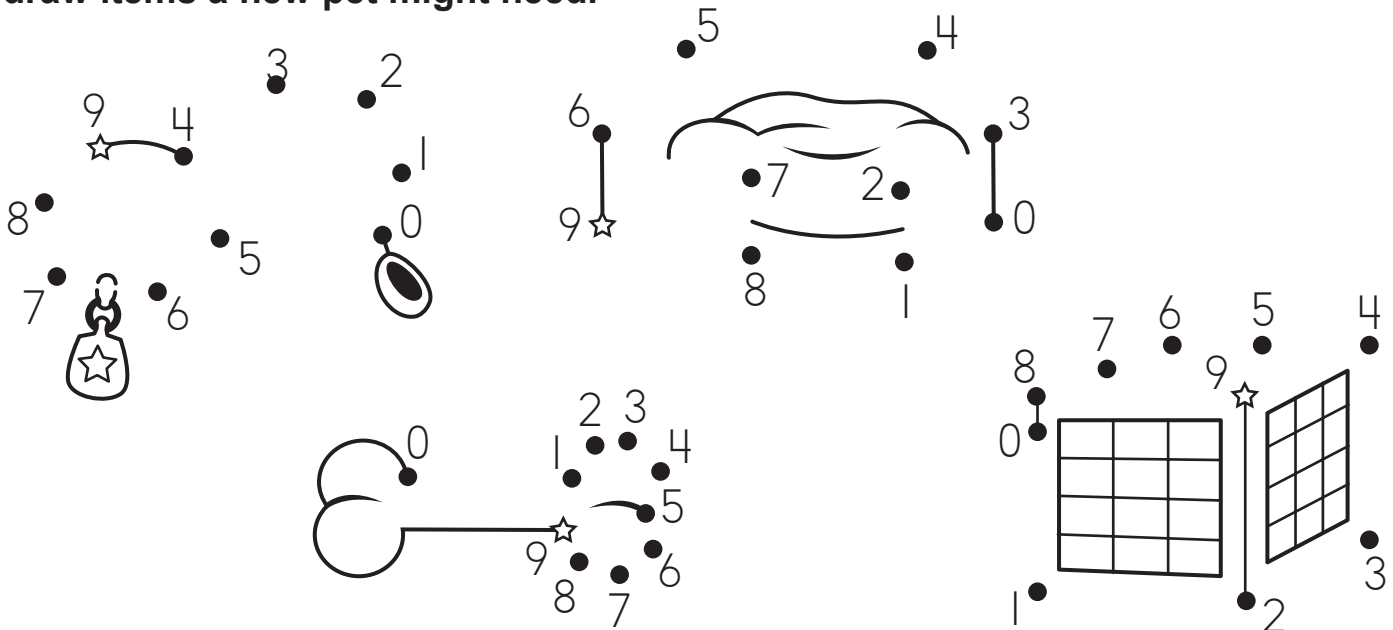
I am  $> 8$ . I am  $< 10$ . What number am I?



We are  $> 4$ . We are  $< 8$ . What numbers are we?



Begin each dot-to-dot on the numeral with the star. Count backward and draw items a new pet might need.



$$\begin{array}{r} 13 \\ - 4 \\ \hline \square \end{array}$$

$$\begin{array}{r} 11 \\ - 6 \\ \hline \square \end{array}$$

$$\begin{array}{r} 10 \\ - 7 \\ \hline \square \end{array}$$

$$\begin{array}{r} 12 \\ - \square \\ \hline 7 \end{array}$$

$$\begin{array}{r} 10 \\ - 8 \\ \hline \square \end{array}$$

$$\begin{array}{r} 11 \\ - 4 \\ \hline \square \end{array}$$

$$11 - 7 = \square \quad 12 - 8 = \square$$

12 s are in the . A  eats 5 s.

How many s are **left** in the ? \_\_\_\_\_

\_\_\_\_\_ s