

Add the numbers. Then count by 3s to 30 as you count down on the answers. Skip count by 2s two times as you connect the dots to finish the picture.

$3 = \boxed{3}$

$3 + 3 = \boxed{\phantom{00}}$

$3 + 3 + 3 = \boxed{\phantom{00}}$

$3 + 3 + 3 + 3 = \boxed{\phantom{00}}$

$3 + 3 + 3 + 3 + 3 = \boxed{\phantom{00}}$

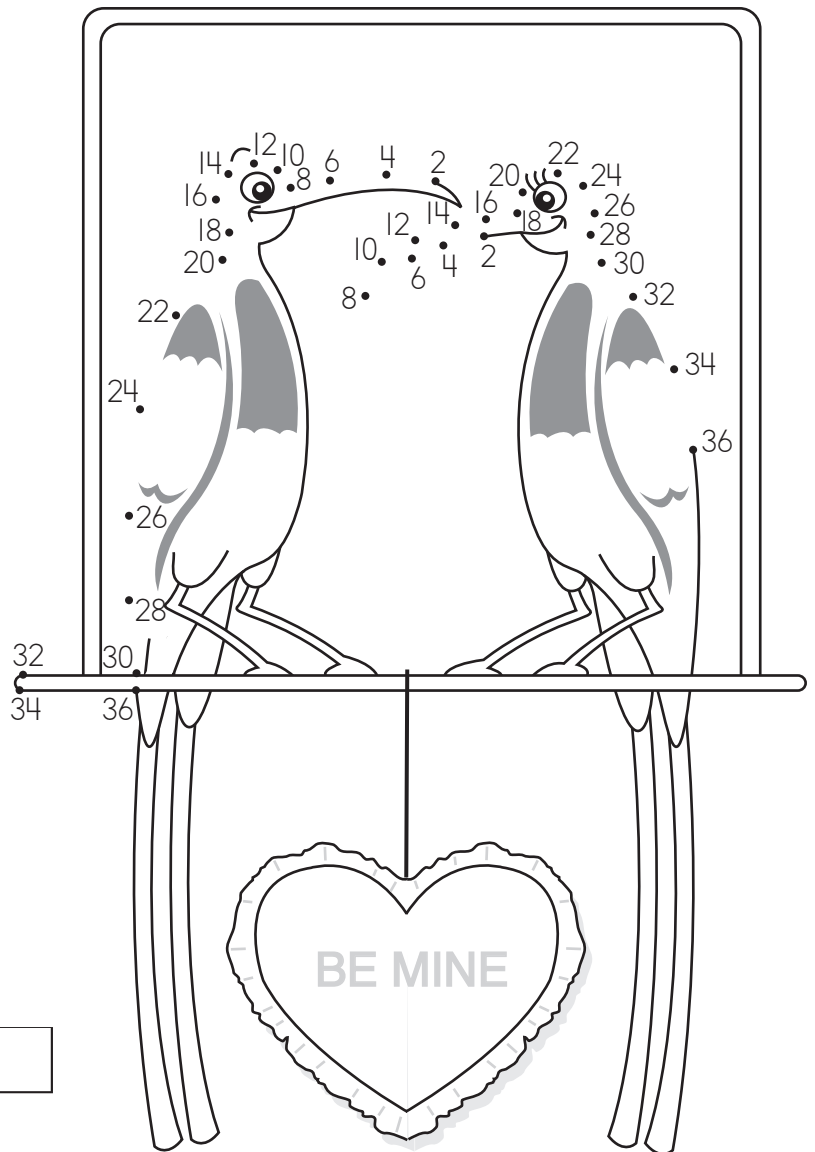
$3 + 3 + 3 + 3 + 3 + 3 = \boxed{\phantom{00}}$

$3 + 3 + 3 + 3 + 3 + 3 + 3 = \boxed{\phantom{00}}$


$3 + 3 + 3 + 3 + 3 + 3 + 3 + 3 = \boxed{\phantom{00}}$

$3 + 3 + 3 + 3 + 3 + 3 + 3 + 3 + 3 = \boxed{\phantom{00}}$

$3 + 3 + 3 + 3 + 3 + 3 + 3 + 3 + 3 + 3 = \boxed{\phantom{00}}$



Draw a path from President George Washington to President Abraham Lincoln as you follow the subtraction answers through the maze.



$$\begin{array}{r} 10 \\ - 4 \\ \hline \end{array}$$

$$\begin{array}{r} 19 \\ - 8 \\ \hline \end{array}$$

$$\begin{array}{r} 12 \\ - 7 \\ \hline \end{array}$$

$$\begin{array}{r} 16 \\ - 8 \\ \hline \end{array}$$

$$\begin{array}{r} 14 \\ - 4 \\ \hline \end{array}$$

$$\begin{array}{r} 7 \\ - 0 \\ \hline \end{array}$$

$$\begin{array}{r} 13 \\ - 9 \\ \hline \end{array}$$

$$\begin{array}{r} 9 \\ - 7 \\ \hline \end{array}$$


$$\begin{array}{r} 17 \\ - 5 \\ \hline \end{array}$$

$$\begin{array}{r} 18 \\ - 9 \\ \hline \end{array}$$

$$\begin{array}{r} 19 \\ - 4 \\ \hline \end{array}$$

$$\begin{array}{r} 16 \\ - 5 \\ \hline \end{array}$$

$$\begin{array}{r} 19 \\ - 5 \\ \hline \end{array}$$



How many presidents' faces are carved on Mt. Rushmore? \_\_\_\_