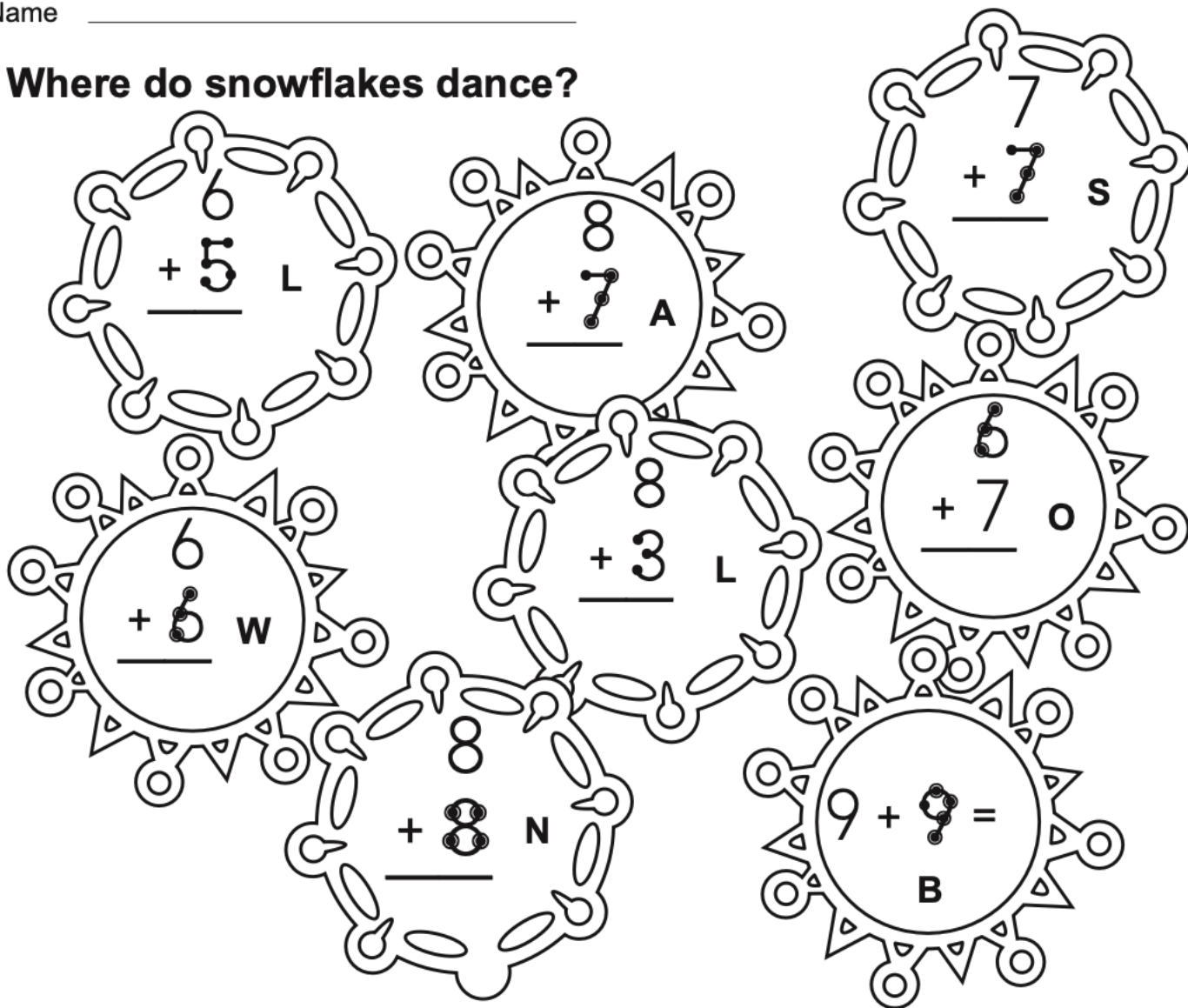







Name _____

Where do snowflakes dance?



At the _____
 14 16 13 12 18 15 11 11

Tom threw 9 snowballs ○.
 So did Tim.
 What is the **total** number of snowballs thrown?
 Write the **addition fact**.

		 S
		 S
	 S	

Name _____

Solve the problems, then follow the answers through the maze.

1	2
$6 \overline{)35}$	$2 \overline{)13}$
3	4
$5 \overline{)40}$	$7 \overline{)60}$
5	6
$3 \overline{)6}$	$8 \overline{)65}$
7	8
$1 \overline{)9}$	$4 \overline{)19}$

