



Fall is a busy time of year for the CritterCrew! UnoBear made delicious apple cider to sell to his woodland neighbors.

Draw **1 more** apple in Uno's paw. How many apples is Uno holding **in all**? _____



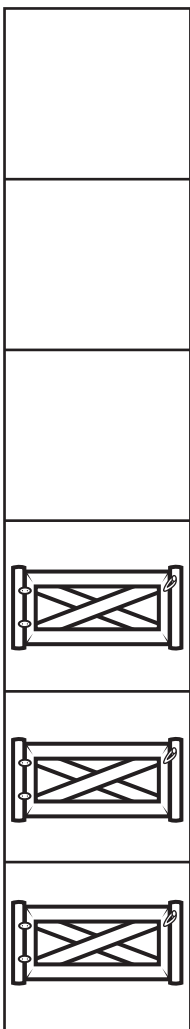


Add 1 more apple to the tree. Now what is the **total** number of apples in the tree? _____

Then **add 1 more** apple on Uno's table. What is the **sum** of the apples on the table? _____





1. At the bottom of each **column**, write the **total** number of farm items.
2. Fold the worksheet on the dotted line to cover 2 farm items in each **column**.
3. On the folded paper, write the number of items that **remain**.
4. Which **column** has the **most** farm items?
5. Which **column** has the **least**?

A**B****C****D****E**

← Fold along dotted line. →

