





How many apples do you see? Draw **1 more** apple. Write the number of apples there are **altogether**.




How many apple seeds do you see? Draw **1 more** apple seed. Then write the **total** number of seeds.



How many apple pies do you see? Draw **1 more** apple pie. Write the number of pies **in all**.




How many caramel apples do you see? Draw **1 more** caramel apple. Write the **sum** of the apples.





SkipperSkunk raked 3 baskets of leaves in the morning. He raked **1 more** basket in the afternoon. On the tree stump, write the **total** number of baskets Skipper raked.



Before school, MirabelMouse filled 6 baskets with leaves. She filled **1 more** after school. How many baskets did Mirabel fill **in all**? Write the **sum** on the tree stump.

