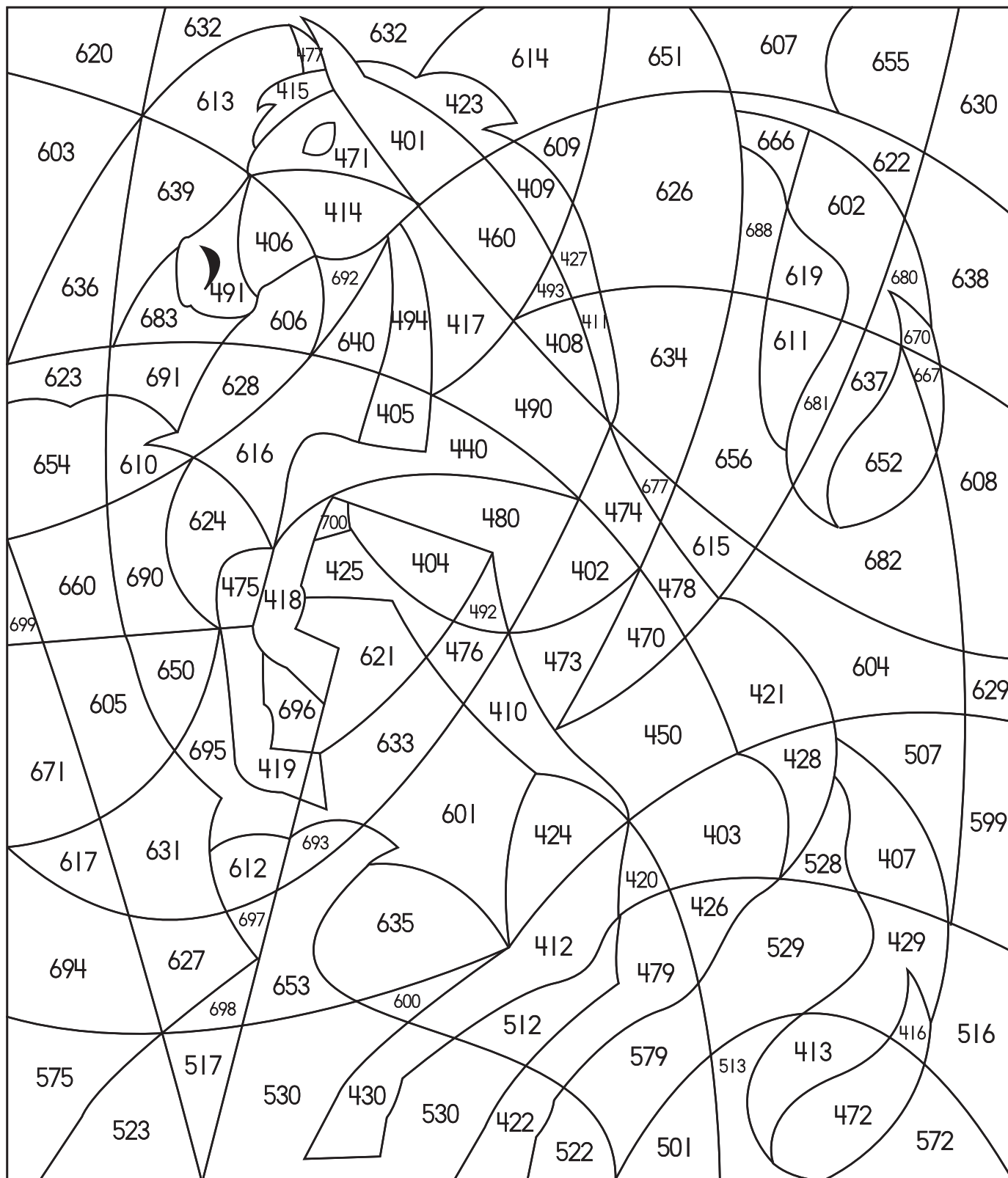




Color the areas with numbers 401 to 500 gray, 501 to 600 green, and 601 to 700 blue.






Read the word problem. Draw a picture of the problem. Write the answer.

There are 34 peas on a plate.
19 peas are small baby peas.
The rest are large green peas.
How many large peas are there?

peas




Kelly draws 50 □s on a piece
of paper. 17 □s are green.
9 are red. The rest are blue.
How many □s are blue?

squares



There are 31 coins in a jar.
16 pennies are new. 5 pennies are old.
The other coins are nickels.
How many coins are nickels?

nickels



Carter glued 34 stickers on his
bedroom wall. 15 of the stickers
are of dogs. 13 are of cats.
How many stickers are of something
besides dogs and cats?

stickers

