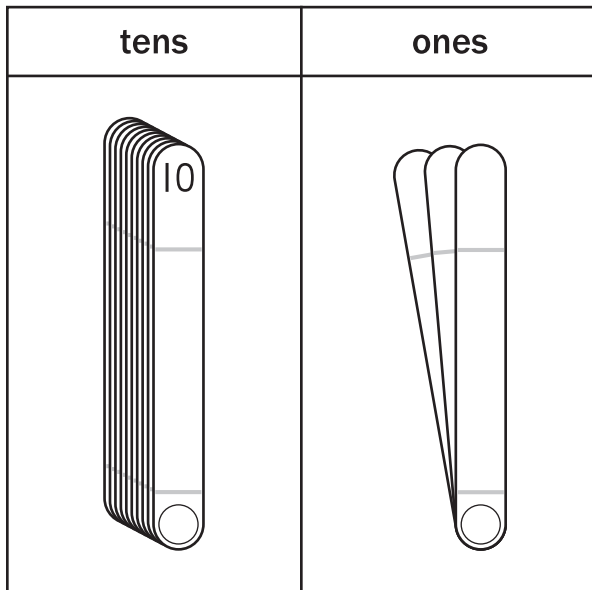
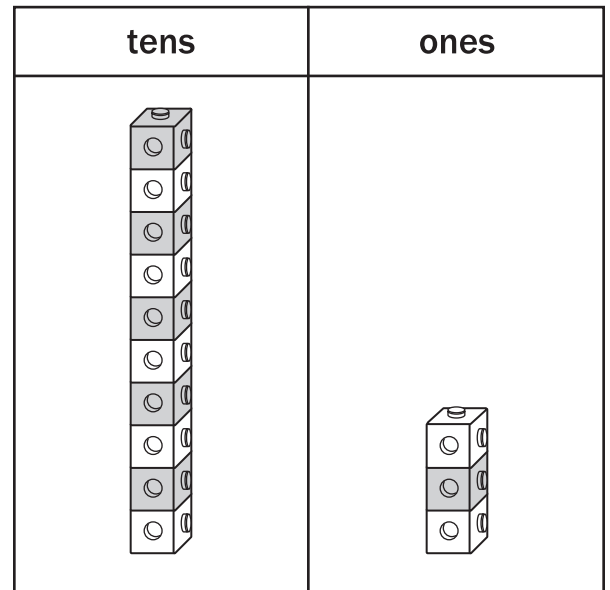


Use the place value models. Trace or write the numbers.



=

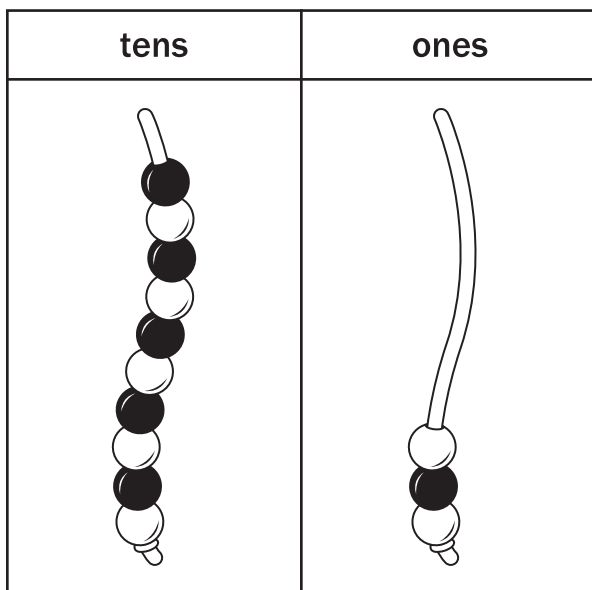


1

3

1

3

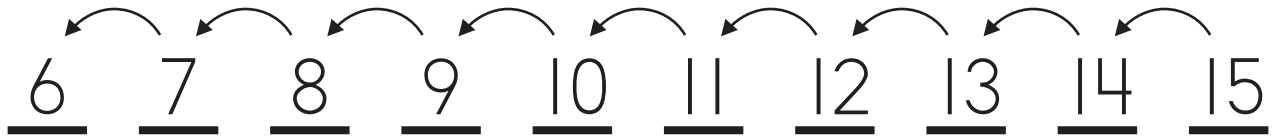


=

1

3

Count backward. Write the difference. Fill in the unknown. Read, answer, and write the word problem.



$15 - 6 = 9$

$15 - 9 = 6$

$15 - \square = 9$

$15 - \square = 6$

$\square - 6 = 9$

$\square - 9 = 6$

$15 - 6 = \quad$

$15 - 9 = \quad$

We have 15 cups of . We eat 6 cups of .

How many cups of are **left**?                  cups